

Practice Problems

Plotting Points---

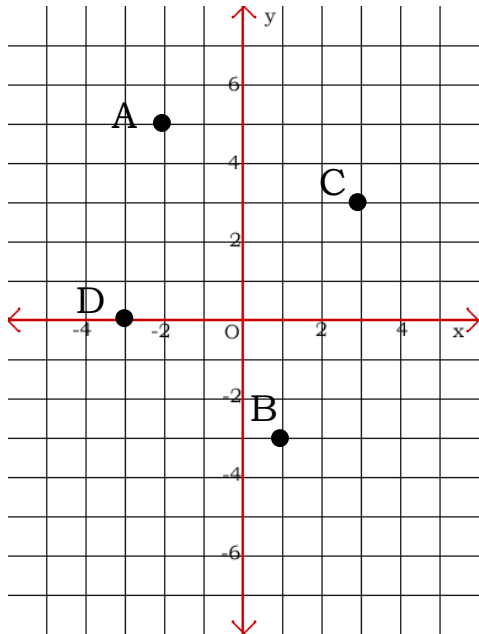
In the Cartesian Plane

Name _____

Class _____

Instructions: Approximate the coordinates of the points---what is the (x,y)?

ex)



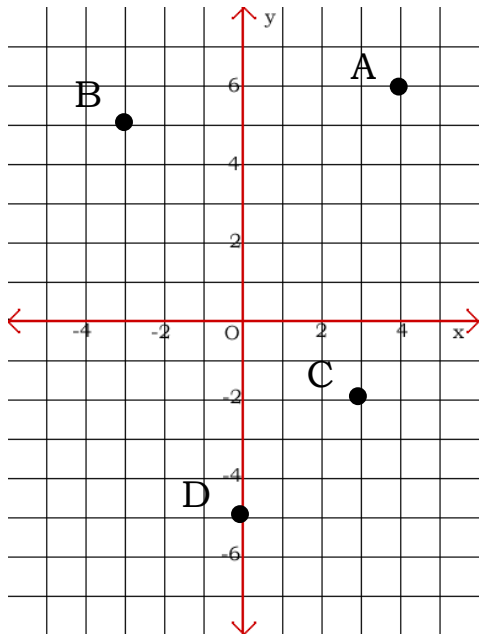
A (-2, 5)

B (1 , -3)

C (3 , 3)

D (-3 , 0)

1.)



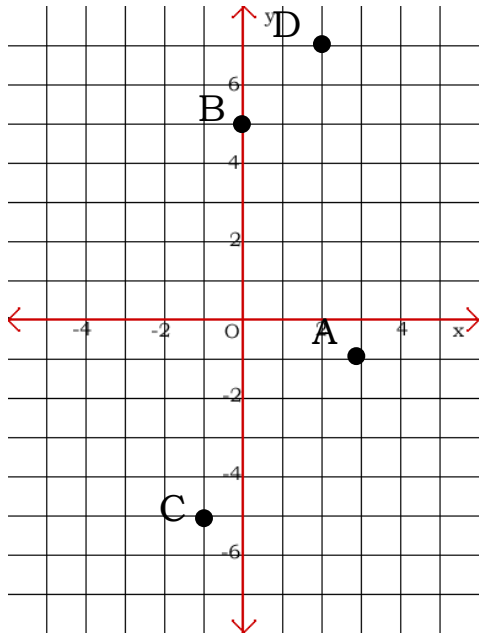
A (,)

B (,)

C (,)

D (,)

2.)



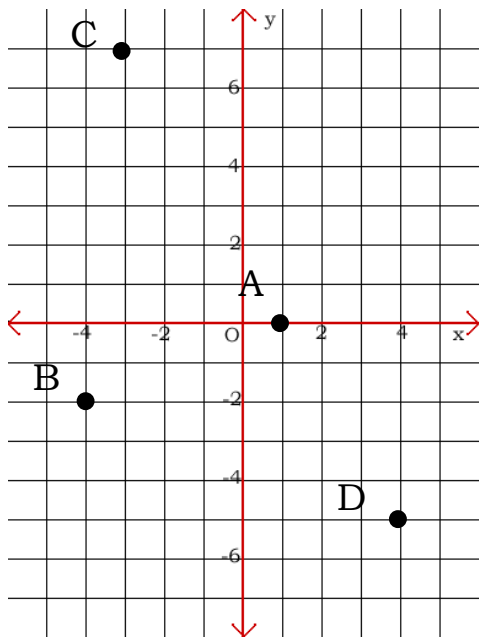
A (,)

B (,)

C (,)

D (,)

3.)



A (,)

B (,)

C (,)

D (,)

Find the coordinates of the point---the (x,y)---and the letter of the problem on the axis provided

- A.) Five units above the x-axis and two units to the right of the y-axis
- B.) On the x-axis and four units to the right of the y-axis
- C.) Two units below the x-axis and three units to the right of the y-axis
- D.) Five units below the x-axis and four units to the left of the y-axis
- E.) On the y-axis two units above the x-axis

